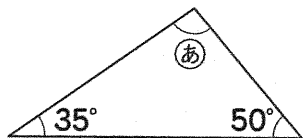
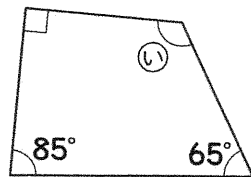


①～③の角度は何度ですか。計算で求めましょう。

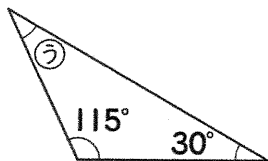
①



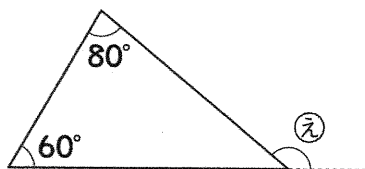

②



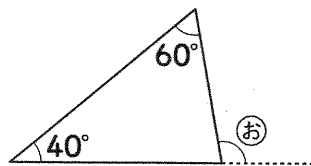

③




④

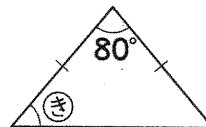



⑤

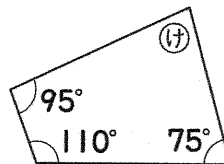



⑦

二等辺三角形

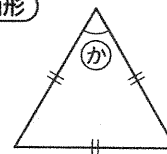



⑨

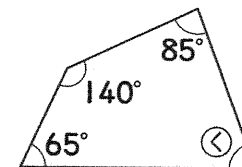



⑥

正三角形




⑧




⑩

